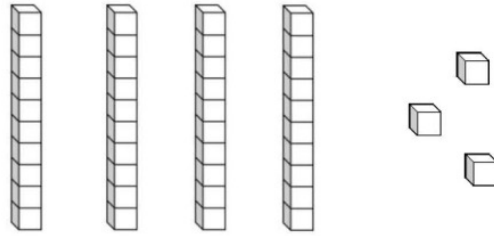


**DAY**  
Week One  
**1**



Count by tens with leftovers. How many cubes?



\_\_\_ tens and \_\_\_ ones



Add to find the sum:

$6 + 7 =$

$8 + 2 =$

$6 + 3 =$


$7 + 7 =$

$9 + 6 =$

$8 + 5 =$

$9 + 4 =$

$7 + 7 =$



Draw lines to cut the pizza into parts for you and three friends.



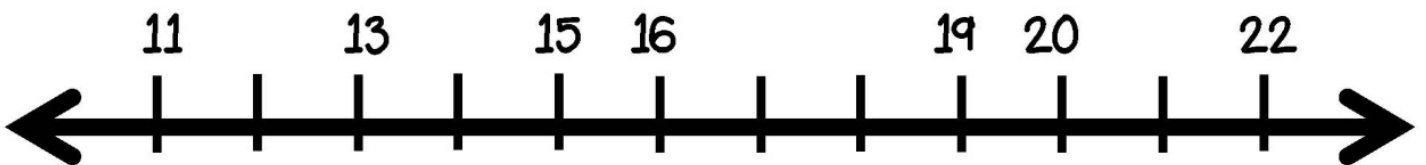
One more than 32 is \_\_\_\_ . One less than 32 is \_\_\_\_ .

Ten more than 32 is \_\_\_\_ . Ten less than 32 is \_\_\_\_ .

One more than 48 is \_\_\_\_ . One less than 48 is \_\_\_\_ .

Ten more than 48 is \_\_\_\_ . Ten less than 48 is \_\_\_\_ .

Count forward to find the missing numbers.



**DAY**  
Week One  
**(2)**

Five beach balls are yellow and six beach balls are red. How many beach balls are there in all? Draw a picture and write a number sentence.




Add and subtract:

10	12	20
<u>+6</u>	<u>+3</u>	<u>+4</u>

20	40	30
<u>-6</u>	<u>-20</u>	<u>-2</u>

Draw the time:



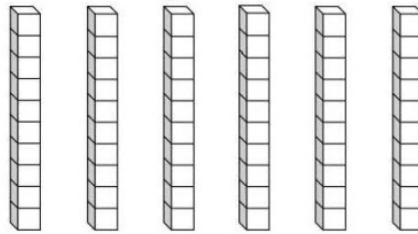
eight  
o'clock



five  
thirty

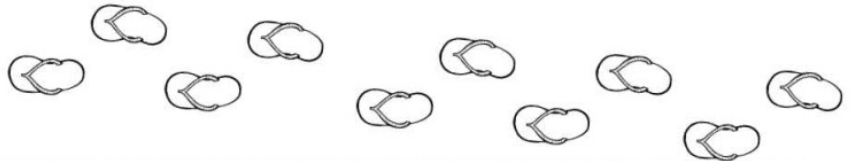
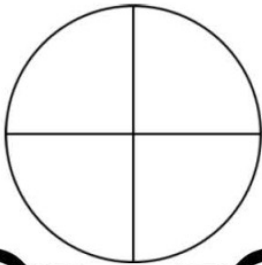


Count by tens. How many cubes?



\_\_\_\_\_ counters

Color in two quarters  
of the circle.




Count backward to find the missing numbers.

46

48

52

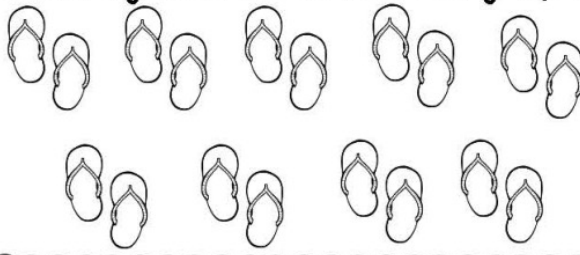


# DAY

Week One

# 3

Count by two to find how many flip-flops.





There are

\_\_\_\_\_ flip-flops

in all.

Draw a circle.



How many ways can you make ten by adding?

$4 + 6 = 10$

$6 + \quad = 10$

$\quad + 5 = 10$

$3 + \quad = 10$

$7 + 3 = 10$

$\quad + 9 = 10$

$9 + 1 = 10$

$8 + \quad = 10$

$2 + \quad = 10$

Find the missing numbers.

$5 + 6 =$

$6 + 5 =$

$6 + 6 =$

$10 + \quad = 12$

$8 + \quad = 12$

$9 + \quad = 12$

$6 + \quad = 13$

$10 + \quad = 13$

$4 + \quad = 7$

$7 + \quad = 13$

$9 + \quad = 13$

$\quad + 3 = 7$

$13 - \quad = 7$

$8 + \quad = 13$

$4 + 3 =$

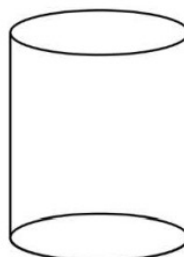
Do you see the patterns?

Fill in the missing numbers.

	33	34		36
42	43		45	
	53			56

This 3D shape is

a...



Circle

Square

Cylinder

**DAY**  
Week One  
**4**

Seven kids went to the beach. Three kids went home. Then six more kids came. How many kids are there now? Draw a picture and write a number sentence.

Subtract to find the difference

$3 - 2 =$

$8 - 2 =$

$6 - 3 =$

$7 - 7 =$

$11 - 7 =$

$5 - 2 =$

$6 - 3 =$

Find the number by counting on.


$11 +$    $=$          

Are the equations true or false?


$3 + 4 = 4 + 3$     T F

$7 + 4 = 4 + 6$     T F

$9 + 8 = 8 + 9$     T F



Circle the pail that is taller.




How many parts are left?



         out of          parts

Each starfish has five points. Count by five to see how many points there are on all of the starfish.




There are

         points

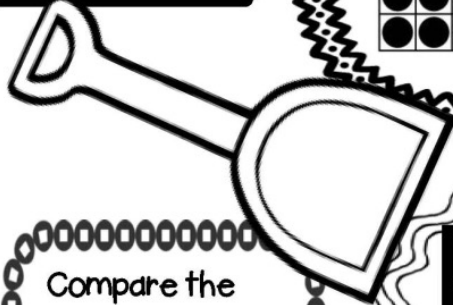
in all.

**DAY**  
Week One  
**5**

Count by ten. How many Counters?



There are \_\_\_\_\_ counters in all.



Compare the numbers. Write  $>$ ,  $<$ , or  $=$ .

33 \_\_\_ 57

12 \_\_\_ 18

24 \_\_\_ 31

44 \_\_\_ 33

15 \_\_\_ 15

72 \_\_\_ 27


26 \_\_\_ 54

92 \_\_\_ 91

53 \_\_\_ 43

71 \_\_\_ 74

Graph the number of shells.



7			
6			
5			
4			
3			
2			
1			
0			
Number of Kinds of Shells			

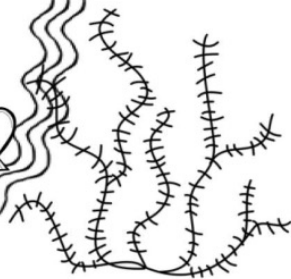
1. What kind of shell has the most?



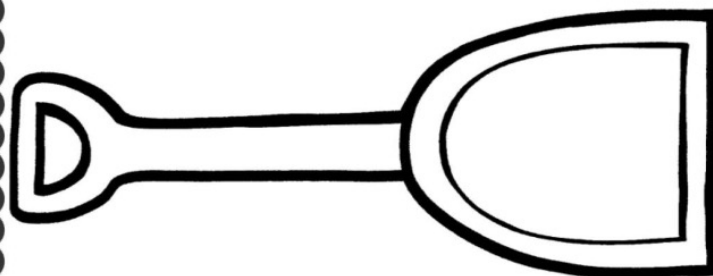
2. What two kinds of shells have the same number?



3. What kind of the shell has the least?



About how many seashells long is the shovel?



The shovel is \_\_\_\_\_ seashells long.